

I THINKERS OLYMPIAD

CLASS 1

MATHEMATICS

PAPER ID: 1M23



QUESTIONS: 25

DURATION: 45 MINS

INSTRUCTION: Carefully read the questions before answering. Darken only one oval for one question. More than one darkened oval will result in incorrect response.

EACH QUESTION CARRIES 1 MARK. NO MARKS WILL BE CUT FOR WRONG ANSWERS.

Breath In
1...2...3...4..



Breath Out
1...2...3...4..



Repeat Twice

1

Jenny has 0 coins.

Mimi has 6.

How many coins altogether?



2

A bag has 7 marbles in.

3 are gold, 4 are silver.

Which equation tells this story.

a) $4 + 7 = 3$

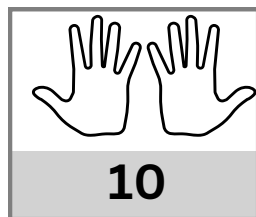
b) $3 + 4 = 7$

c) $7 + 4 = 3$

d) $7 + 4 + 3 = 14$

3

44 +



=

a) 44

b) 34

c) 54

d) 24

Rough Work

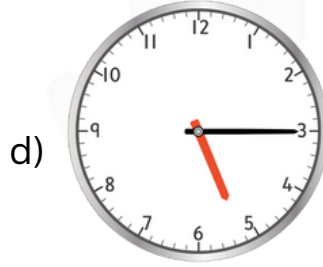
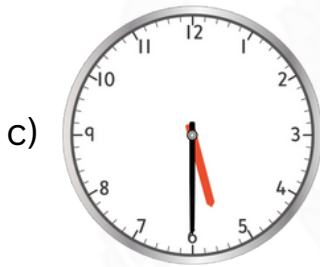

4

Which is the longest amount of time?

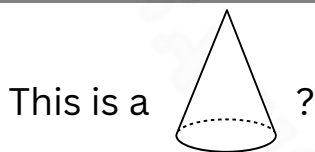
- a) Quarter of an hour
- b) Half an hour
- c) 65 Minutes
- d) 1 Hour

5

Which is half past 5?



6



- a) Pyramid
- b) Cone
- c) Cylinder
- d) Cube

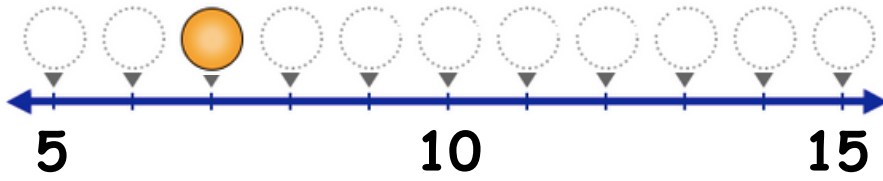
7

Which is the least Money?



8

Identify the position of coloured ball?



a) 3


b) 10

c) 7

d) 5

9

Choose the matching number and word.



a) 5, Four


b) 6, Five

c) 4, Five

d) 5, Five

10

How Many cubes?



a) 8


b) 20

c) 50.

d) 26

11

Which is the shortest?




Tower 1



Tower 2



Tower 3



Tower 4

a) Tower 1

b) Tower 2

c) Tower 3

d) Tower 4

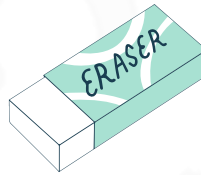
12

Which of these objects can roll?

a)



b)



c)



d)



13

How many fingers do you have on one hand?

a) 10

b) 20

c) 3

d) 5

14

What comes after 25?

a) 52

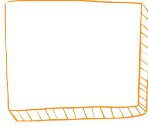
b) 35

c) 26


d) 24

Which shape is like a slice of bread?

a)




b)



c)



d)



Find the objects that are round in shape.

- a) Clock, Spoon, and Plate
- b) Spoon, Triangle, and Rectangle
- c) Ball, Orange, and Sun
- d) Dog, Cat, and Fish

Look at this sequence of shapes:



What shape comes next in the pattern?



Find the objects that are long in shape.

- a) Banana, Ball, and Book
- b) Snake, Pencil, and Stick
- c) Clock, Spoon, and Plate
- d) Dog, Cat, and Fish

How full?



- a) Full
- b) More than half full
- c) Less than half full
- d) Empty

What is the number that looks like two zeros side by side?

- a) 20
- b) 22
- c) 000
- d) 00

Which number comes just before 18?

- a) 9
- b) 18
- c) 19
- d) 17

----- End of the question paper -----

This page doesn't contain any questions.

This page doesn't contain any questions.

This page doesn't contain any questions.



Until you receive your iThinkersOlympiad results, kindly hold onto the question paper as it will be essential for a complete understanding of your results.



iThinkersOlympiad

BY



We value your feedback!

We welcome your feedback and suggestion on this paper! Please email us at feedback@fivesep.in or visit



www.ithinkersolympiad.com/feedback

MATHS

PAPER ID: 1M23
QUESTIONS: 25
DURATION: 45 MINS

CLASS 1

2023